

A greengrocer had 115 green apples and 83 red apples. On Monday he sold 72 apples. How many apples did the greengrocer have left?



On Monday Tom's Bakery had 90 chocolate muffins for sale. 25 chocolate muffins were sold in the morning and 46 in the afternoon. How many chocolate muffins were left?



Peter had 55 marbles. He gave 16 marbles to his brother and 19 to his best friend. How many marbles did Peter have left?




A truck driver needed to deliver 750 sacks of flour. He delivered 235 sacks to a shop on Smith Street and 367 sacks to a shop on Bent Avenue. How many more sacks did he need to deliver?





After spending \$55.00 on a shirt and \$124.00 on a pair of shoes Tom had \$40.00 left in his wallet. How much money did Tom have to begin with?



A school has 146 green tennis balls and 152 yellow ones. 250 tennis balls are stored in the gymnasium and the rest are in the yard. How many tennis balls are in the yard?



 Dad has 400 books to pack into boxes. On Monday he packs 222 books and on Tuesday he packs 148 books. How many more books does dad need to pack into boxes?

 There are 157 girls and 201 boys in Grade 3. Out of these, 244 students have brown eyes. How many 3<sup>rd</sup> grade students do not have brown eyes?

A shoe factory produced 345 pairs of shoes in one week and 354 pairs the next week. If 673 pairs were delivered to a department store, how many pairs were not delivered?



A farmer sold \$145.00 worth of pears and \$273.00 worth of peaches at the market. Before going home he bought a new ladder for \$89.00. How much money did he have left?



James wants to buy a soccer ball worth \$95.00 and a bike worth \$349.00. If he only has \$375.00 how much more money does he need?



Maria and Nicky picked tomatoes in their vegetable garden. Maria picked 49 tomatoes and Nicky picked 62. If they used 25 tomatoes to make pasta sauce how many did they have left?

